

ಕರ್ನಾಟಕ ಶಾಲಾ ಗುಣಮಟ್ಟ ಮೌಲ್ಯಾಂಕನ ಮತ್ತು ಅಂಗೀಕರಣ ಪರಿಷತ್ತು (ರಿ.)

ಕೆ.ಎಸ್.ಇ.ಇ.ಬಿ., 6ನೇ ಅಡ್ಡ ರಸ್ತೆ, ಮಲ್ಲೇಶ್ವರಂ, ಬೆಂಗಳೂರು - 560 003.

ತರಗತಿ - 8

ಕಲಿಕಾ ಸಾಧನಾ (ಅಣಕು) ಸಮೀಕ್ಷೆ - 2017-18

81E

ವಿಷಯ: ಪ್ರಥಮ ಭಾಷೆ, ವಿಜ್ಞಾನ, ಸಮಾಜ ವಿಜ್ಞಾನ, ಗಣಿತ.

ವಿದ್ಯಾರ್ಥಿಗಳಿಗೆ ಸೂಚನೆಗಳು

1. ಪ್ರಶ್ನೆಗಳನ್ನು ಮೊದಲು ಓದಿ ಅರ್ಥೈಸಿಕೊಳ್ಳುವುದು.
2. ಪ್ರಶ್ನೆ ಪತ್ರಿಕೆಯಲ್ಲಿ ಬಲಗಡೆ ನೀಡಿರುವ ಸಂಖ್ಯೆಯನ್ನು ಓ.ಎಂ.ಆರ್.ನಲ್ಲಿ ನಿಗದಿಪಡಿಸಿದ ಸ್ಥಳದಲ್ಲಿ ಕಡ್ಡಾಯವಾಗಿ ನಮೂದಿಸುವುದು.
3. ಪ್ರತಿ ಪ್ರಶ್ನೆಗೆ A B C D ಎಂಬುದಾಗಿ 4 ಆಯ್ಕೆಯ ಉತ್ತರಗಳನ್ನು ನೀಡಲಾಗಿರುತ್ತದೆ. ಅವುಗಳಲ್ಲಿ ಸರಿಯಾದ ಒಂದು ಉತ್ತರಕ್ಕೆ ಮಾತ್ರ ಓ.ಎಂ.ಆರ್.ನಲ್ಲಿ '✓' ಮಾಡುವುದು.
ಉದಾಹರಣೆ: 2ನೇ ಪ್ರಶ್ನೆಗೆ B. ಸರಿ ಉತ್ತರವಾಗಿದ್ದಲ್ಲಿ ಹೀಗೆ '✓' ಮಾಡುವುದು.

A	B	C	D
<input type="checkbox"/>	<input checked="" type="checkbox"/>	<input type="checkbox"/>	<input type="checkbox"/>
4. ಓ.ಎಂ.ಆರ್.ನಲ್ಲಿ ವಿದ್ಯಾರ್ಥಿಗಳಿಗೆ ನಿಗದಿಪಡಿಸಿದ ಸ್ಥಳದಲ್ಲಿ ವಿದ್ಯಾರ್ಥಿಗಳು ಸಹಿ ಮಾಡುವುದು ಹಾಗೂ ಶಿಕ್ಷಕರು ಶಿಕ್ಷಕರಿಗೆ ನಿಗದಿಪಡಿಸಿರುವ ಸ್ಥಳದಲ್ಲಿ ಸಹಿ ಮಾಡುವುದು.

English - [F.L.]

1. The appropriate preposition used in the following sentence is
My Sister's wedding is _____ Hotel Taj _____ Mumbai
(A) at, in B) in, at C) near, at D) on, in
2. The specialist for the following ailment is 'Priya cannot see the letters on the board'.
A) Gynecologist B) Cardiologist
(C) Ophthalmologist D) Psychiatrist
3. This is what we are missing in broad day light.
(A) Moon and Stars in the sky B) Bright sunlight
C) Grazing of sheep or cows D) Children happily playing in the field.
4. The appropriate words used to complete the sentence.
Two years ago, the shop was _____ and it _____ to Exist.
(A) seized, ceased B) closed, seized
C) started, ceased D) constructed, seized
5. His name was Flemming and he was a poor scottish farmer. One day while trying to eke out a living for his family, he heard a cry for help coming from a near by bog. He dropped his tools and ran to the bog.
Flemming dropped his tools and ran to the bog because
(A) he heard a cry for help coming from a nearby bog.
B) he heard somebody singing nearby bog.
C) he saw a tiger moving near the bog.
D) he saw a tree full of fruits & he ran to pluck them.

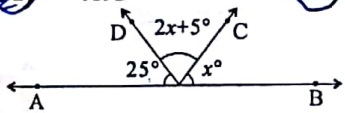
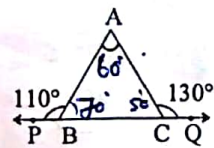
Science

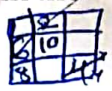
6. The natural resource which has more amount of carbon in it is :
 A) Anthracite B) Lignite C) Peat D) Bituminous
7. The group of similar organisms sharing common genetic structure :
 A) Population B) Community C) Species D) Eco system
8. These are called as the 'Suicidal bags' of the cell :
 A) Ribosome B) Lysosome C) Vacuole D) Mitochondriya
9. A bus travels from 'A' to 'B' with a speed of 40 Km/hour. It travels from 'B' to 'A' with the speed of 60 Km/hour. Its average speed is :
 A) 40 Km h^{-1} B) 60 Km h^{-1} C) 100 Km h^{-1} D) 50 Km h^{-1}
10. This is an example for kinetic energy :
 A) Mangoes on the tree B) A car at the top of the hill
 C) Stretched sling of a catapult D) Blow air on a sheet of paper

Social Science

11. The tools which were used by the people of Middle stone age :
 A) Delicate stone tools B) Hard stone tools
 C) Natural stone tools D) Mega stone tools
12. The rulers of Egypt were called by this name :
 A) Pyramid B) Hike Sose C) Pharaohs D) Osiris
13. This is not a branch of Buddhism :
 A) Hinayana B) Swarnayana C) Mahayana D) Vajrayana
14. The father of Public Administration is :
 A) Luther Gulick B) Pfiffner C) Hali Milton D) Wudro Wilson
15. The International date line passes through :
 A) 180° B) 0° C) 90° D) $8\frac{1}{2}^\circ$

Maths

16. Constructed 3×3 magic square with even numbers in 2 to 18 number in the Central Cell of the magic square is :
 A) 6 B) 9 C) 10 D) 18
17. The Number Multiplied by 9, which gives perfect cube, then the number is :
 A) 9 B) 18 C) 24 D) 729
18. When $(a+b)^2$ is subtracted from $(a-b)^2$, simplified form is :
 A) $4ab$ B) $-4ab$ C) $2b^2$ D) $4b^2$
19. In adjacent fig. value of 'x' is :

 A) $\frac{180^\circ}{32}$ B) $\frac{180^\circ}{33}$ C) 25 D) 50°
20. In adjacent fig. value of $\angle A$ is :

 A) 60° B) 50° C) 70° D) 240°



$2 \times 9 = 18$

$(30 + 3x) = 180 = 60$
 $10 + x = 60$

